



SL IB Chemistry


Your notes

From Models to Materials

Contents

- * Bonding Models
- * Bonding & Properties
- * Properties of Alloys
- * Polymers
- * Addition Polymers



Your notes

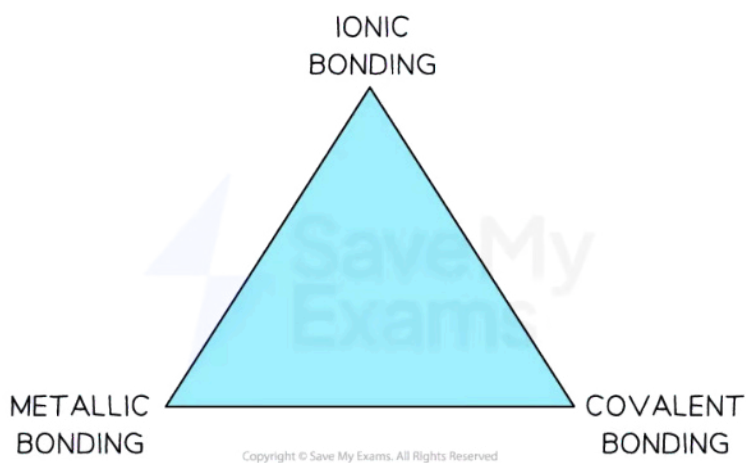
Bonding Models

Bonding Models

Bonding Models

- Models simplify complex systems and allow us to predict and test theories
- As we have seen, chemical bonding broadly falls into three types: **ionic**, **covalent** and **metallic**
- The bonding types can be used to explain chemical and physical properties of substances
- However, like all models, there are limitations and inaccuracies that arise from oversimplification
- For example, take a substance like aluminium chloride, AlCl_3 . The compound consists of a metal and non-metal, so the traditional bonding approach would be to predict it has ionic bonding and the associated properties of an ionic compound such as high melting point and boiling point
 - Aluminium chloride actually melts at 192°C , so it does not behave like an ionic compound
- The fact we know **polar covalent bonds** exist provides evidence that bonding type is not something that can be easily compartmentalised
- Bonding is best thought of as a continuum of the three different bonding types like the area of an equilateral triangle

A bonding model


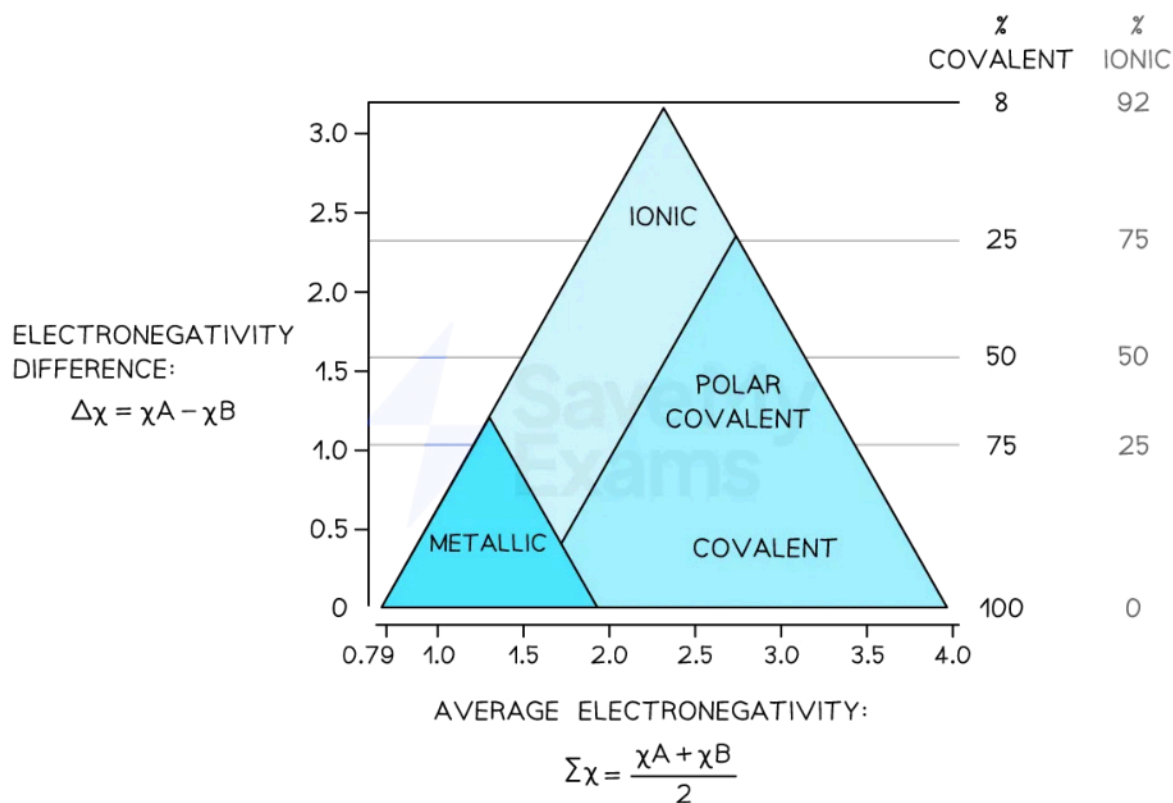


Chemical bonding is a continuum of ionic, covalent and metallic bonding

- The location of an element or compound in the bonding triangle is determined by the electronegativity values of the elements present
- The bonding triangle is anchored by two axes, electronegativity difference on the y-axis and average electronegativity on the x-axis
- The symbol for electronegativity is the Greek letter (chi) χ , pronounced 'ky' as in 'sky'
 - The average electronegativity of two elements, A and B would be: $\Sigma\chi = \frac{\chi_A + \chi_B}{2}$

- The difference in electronegativity between two elements A and B would be: $\Delta\chi = \chi_A - \chi_B$

The Bonding Triangle



The bonding triangle is used to determine the percentage of ionic, covalent and metallic character in an element or compound

- Since elements have zero difference in electronegativity they would be found along the x-axis depending on the electronegativity value of the individual element
- Ionic compounds have a large difference in electronegativity so would be located in the top centre part or apex of the triangle
- Covalent compounds with a low difference in electronegativity would be found in the bottom right and polar covalent compounds in the zone between ionic and covalent

Examiner Tip

- You don't need to learn the bonding triangle as it is found in Section 17 of the Data Booklet
- Electronegativity values are found in the Periodic Table in Section 9.



Your notes

Bonding & Properties

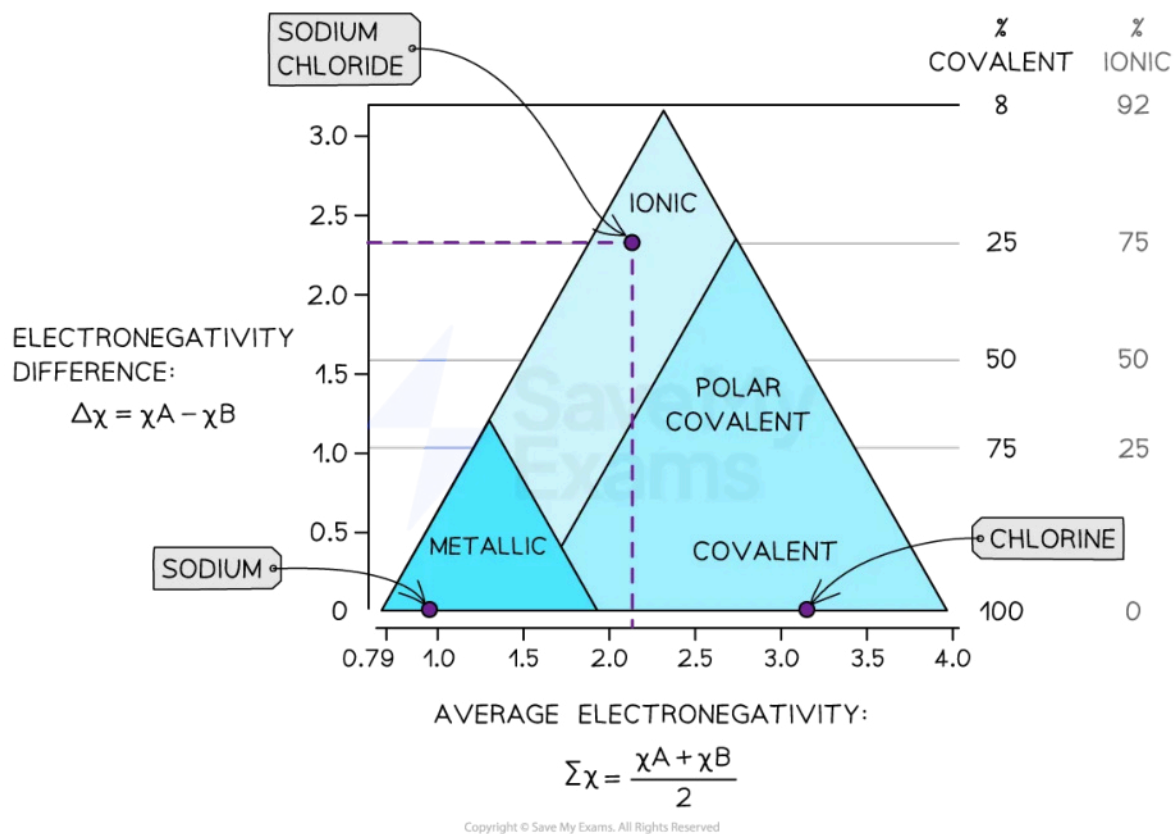

Bonding & Properties

Determining the position of a compound in the bonding triangle


- We can use the electronegativity of elements and binary compounds to find their position in the bonding triangle
- For example, take sodium chloride:

Substance	Average electronegativity	Electronegativity difference	Where it is in the triangle
Na	0.9	$0.9 - 0.9 = 0.0$	Bottom left of the triangle. Na is 100% metallic
Cl ₂	3.2	$3.2 - 3.2 = 0.0$	Bottom right corner. Cl ₂ is 100% covalent
NaCl	$\Sigma\chi = \frac{\chi_A + \chi_B}{2} = \frac{3.2 + 0.9}{2} = 2.1$	$\Delta\chi = \chi_A - \chi_B = 3.2 - 0.9 = 2.3$	Centre top of the triangle. It is about 70% ionic on the triangle

Sodium chloride bonding triangle



The location of sodium chloride on the bonding triangle using electronegativity values



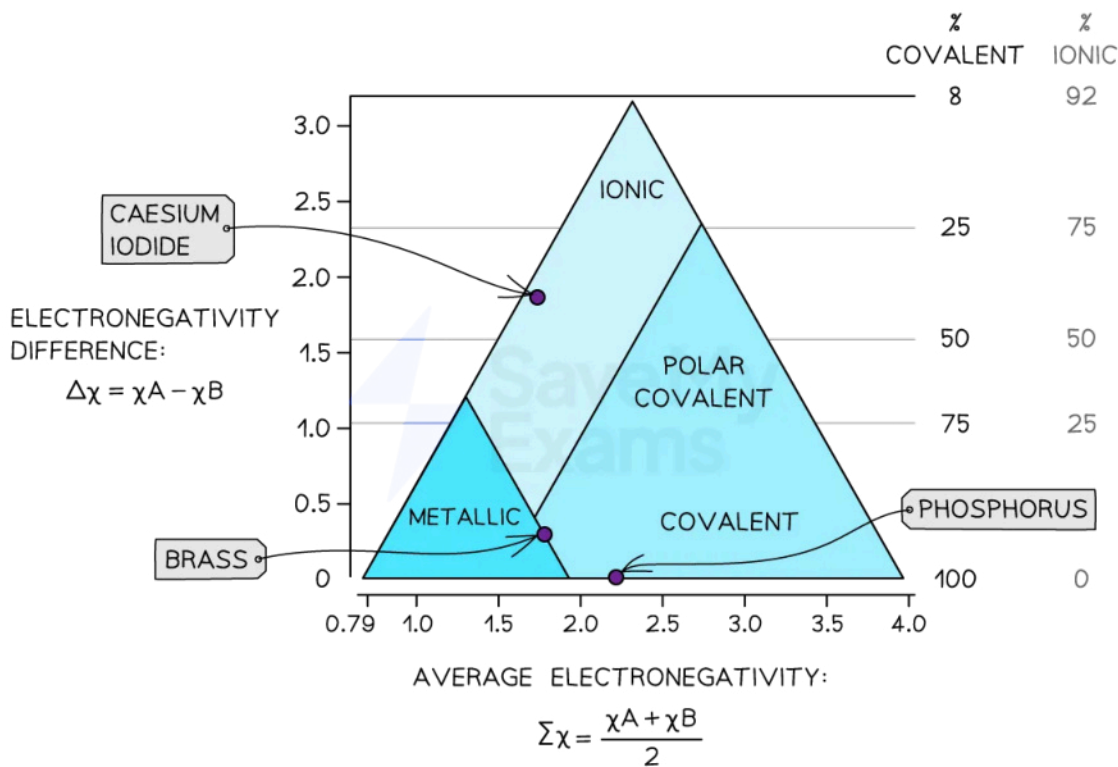
Worked example

Use the bonding triangle and electronegativity values from Section 9 of the data booklet to mark the location for the following substances:

- a) phosphorus
- b) caesium iodide
- c) brass (an alloy of copper and zinc)

Answer

Substance	Average electronegativity	Electronegativity difference
a) phosphorus	2.2	0
b) caesium chloride	$\Sigma\chi = \frac{\chi_A + \chi_B}{2} = \frac{0.8 + 2.7}{2} = 1.8$	$\Delta\chi = \chi_A - \chi_B = 2.7 - 0.8 = 1.9$
c) brass (an alloy of copper and zinc)	$\Sigma\chi = \frac{\chi_A + \chi_B}{2} = \frac{1.9 + 1.6}{2} = 1.8$	$\Delta\chi = \chi_A - \chi_B = 1.9 - 1.6 = 0.3$





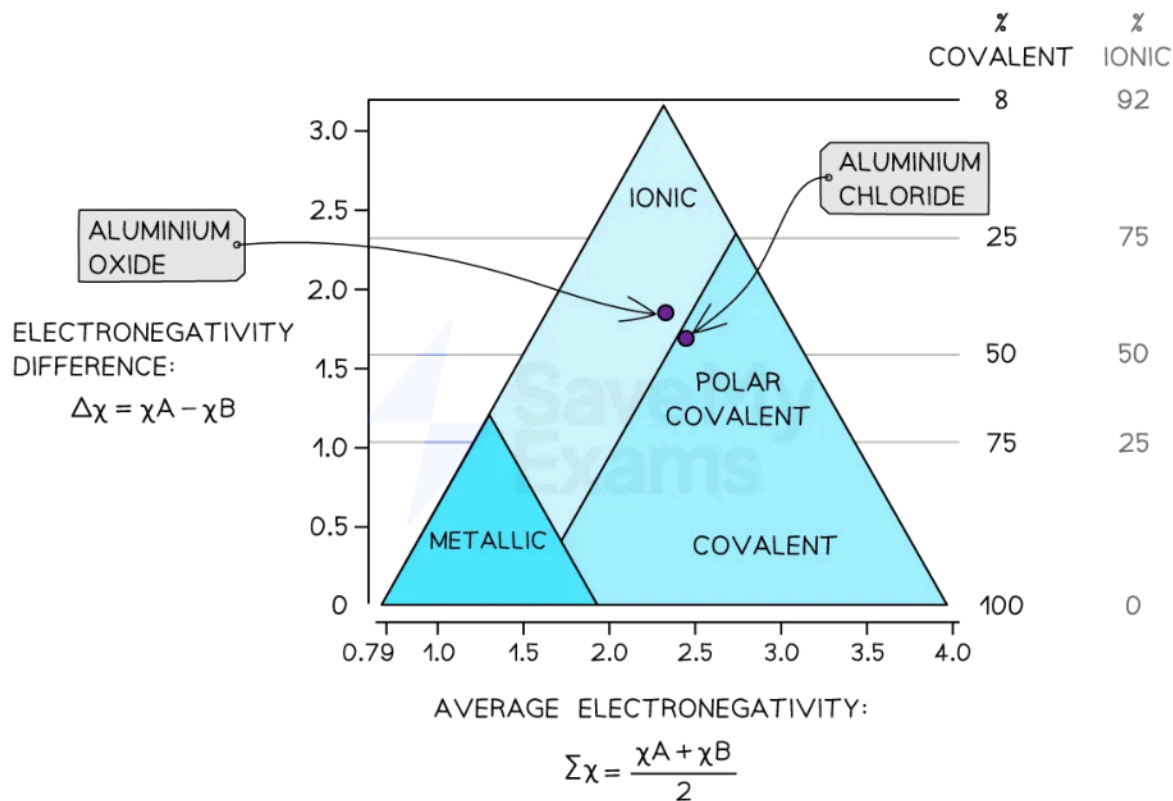
Your notes

Percentages of Bonding Type

- We can also use the bonding triangle to assess the percentage of ionic or covalent character in a compound
- Take aluminium chloride and aluminium oxide as an example:

Substance	Average electronegativity	Electronegativity difference
aluminium oxide	$\Sigma\chi = \frac{\chi_A + \chi_B}{2} = \frac{1.6 + 3.4}{2} = 2.5$	$\Delta\chi = \chi_A - \chi_B = 3.4 - 1.6 =$
aluminium chloride	$\Sigma\chi = \frac{\chi_A + \chi_B}{2} = \frac{1.6 + 3.2}{2} = 2.4$	$\Delta\chi = \chi_A - \chi_B = 3.2 - 1.6 =$

Percentage of ionic or covalent character diagram



The percentage of bonding type character in aluminium oxide and aluminium chloride can be assessed using the bonding triangle

- From this analysis, we can see why there is a significant difference in properties between aluminium oxide and aluminium chloride
 - The melting point of the oxide is 2072 °C, whereas the chloride is 192°C
- The bonding triangle continuum allows for a more accurate assessment of bonding type and the prediction of associated properties

 **Examiner Tip**

Calculations of percentage ionic character are not required.



Your notes



Your notes

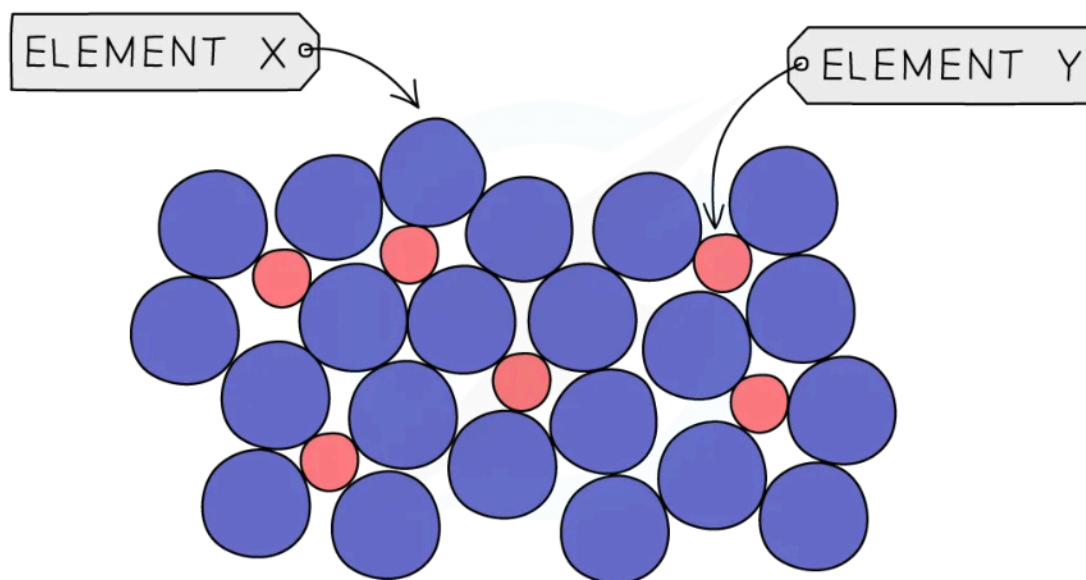
Properties of Alloys

Alloys

What is an alloy?

- Alloys are mixtures of metals, where the metals are mixed together physically but are not chemically combined
- They can also be made from metals mixed with nonmetals such as carbon
- Ions of the different metals are spread throughout the **lattice** and are bound together by the **delocalized** electrons
- It is possible to form alloys because of the **non-directional** nature of the metallic bonds

Particle Diagram of an Alloy



Copyright © Save My Exams. All Rights Reserved




In a metallic lattice the regular structure of metal cations (shown by Element Y) is disrupted by the presence of another element (Element X)

Why do alloys have different properties to pure metals?

- Alloys have distinct properties due to the different packing of the cations in the lattice
- Alloys often have properties that can be very **different** to the metals they contain, for example they can have greater **strength**, **hardness** or **resistance** to **corrosion** or extreme **temperatures**

- Alloys contain atoms of **different** sizes, which **distorts** the regular arrangements of cations
- This makes it more difficult for the layers to slide over each other, so they are usually much harder than the pure metal
- Below is a table of some common alloys and their uses:

**Common Alloys and their Uses Table**

Alloy	Elements present	Properties	Uses
Brass	copper and zinc	strong and resistant to corrosion	door handles, hinges, musical instruments
Steel	iron, carbon and other elements like chromium, vanadium and molybdenum	very strong	construction, bridges, cars
Stainless Steel	iron, chromium, nickel, carbon	corrosion resistant	cutlery, surgical instruments, cookware
Solder	lead and tin	low melting point	joining metals in electrical circuits and jewellery
Bronze	copper and tin	hard and strong resistance to corrosion	medals, sculptures, ship fittings

💡 Examiner Tip

You don't need to learn the specific alloys, but you should be able to use examples you know to explain why alloys have the properties they do compared to pure metals

Polymers



Your notes

Polymers

- Polymers are large molecules built by linking 50 or more smaller molecules called **monomers**
- Polymers are known as macromolecules as they are relatively large compared with other molecules
- Each repeat unit is connected to the adjacent units via **covalent bonds**
- Some polymers contain just one type of unit
 - Examples include poly(ethene) and poly(chloroethene), commonly known as PVC
- Others contain two or more different types of monomer units and which are called **copolymers**
 - Examples include nylon and biological proteins
- Different **linkages** also exist, depending on the monomers and the type of polymerisation
 - Examples of linkages are covalent bonds, amide links and ester links

Monomers Forming Polymers Diagram



Your notes

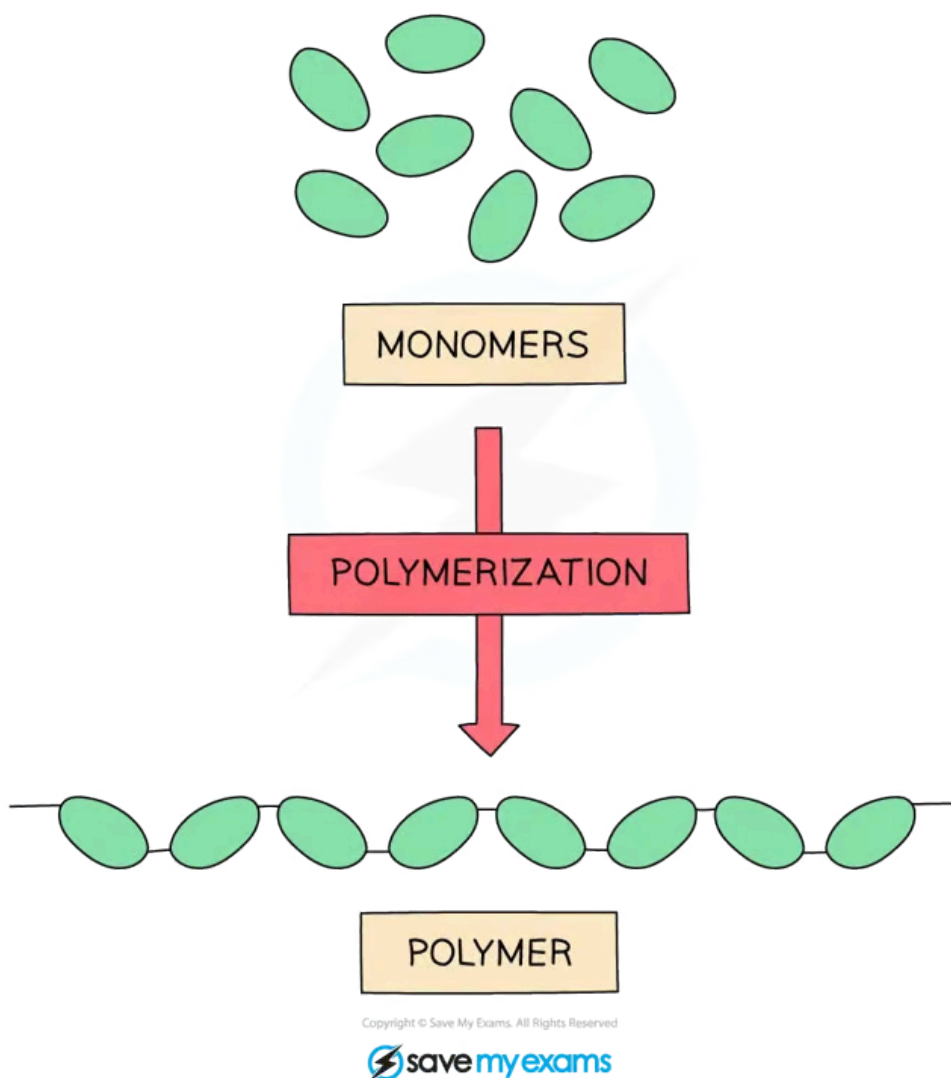

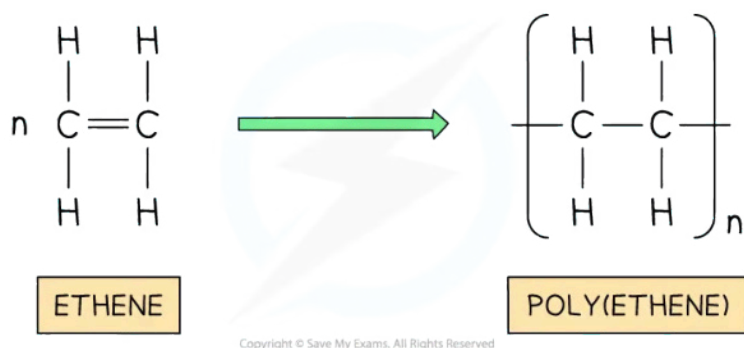


Diagram showing how lots of monomers bond together to form a polymer

- Poly(ethene) is formed by the addition polymerisation of ethene monomers
- Addition polymerisation involves the addition of many monomers to make a long chained polymer
- In this case, many ethene monomers join together due to the carbon carbon double bond breaking
- Polymers are large molecules so their structures re shown as repeating units
 - The polymer poly(ethene) can be represented by the repeating unit below
 - n is the number of monomers in the polymer

Ethene forming poly(ethene) Diagram



Poly(ethene) is formed by addition polymerisation using ethene monomers

Properties of plastics

- Low weight
 - Polymers are loosely packed so will be less dense and lighter than other materials such as metals
- Unreactive
 - The addition polymers made from alkenes are saturated compounds because they do not contain double bonds and the main carbon chain is non-polar and will therefore are unreactive
- Water resistant
 - Polymers are hydrophobic so they repel water instead of absorbing it
- Strong
 - Polymers so are made up of many strong covalent bonds between the monomers
- These properties make plastics useful for packaging, construction, clothing and transportation

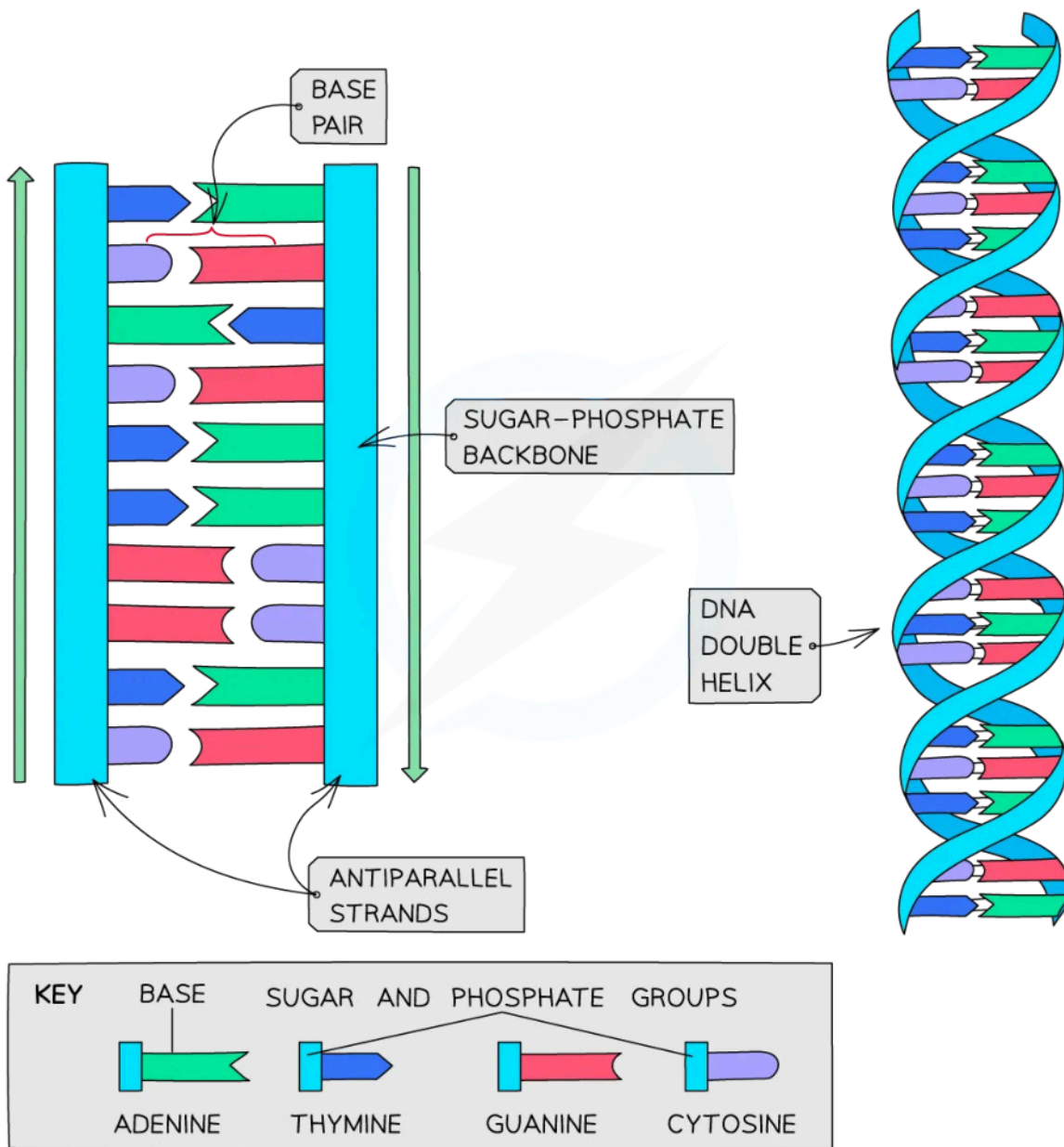
Natural and synthetic polymers

- Proteins, DNA and starch are examples of **natural polymers**
 - Understanding the structure and function of natural polymers has been a major focus of biochemical research for the last 100 years and have contributed to the advancement of vaccines and medicines

DNA is an example of a natural polymer



Your notes



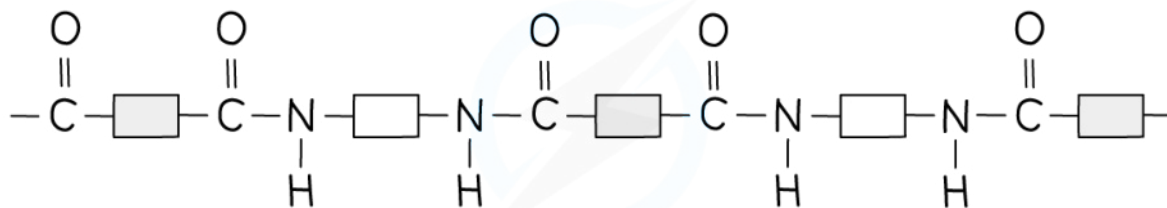
Copyright © Save My Exams. All Rights Reserved

DNA molecules form a three-dimensional structure known as a DNA double helix. It is made from four different monomers known as nucleotides which join together in different combinations to make a long strand

- Plastics are examples of **synthetic polymers** that have widespread uses due to their low weight, low reactivity, water resistance and strength
 - They have become widely distributed across the world
 - Their low reactivity means that they are **non-biodegradable** so will not break down naturally.

- The extensive accumulation of plastics in natural environments remains one of the most pressing environmental concerns

Nylon-6,6 is an example of a synthetic polymer



Copyright © Save My Exams. All Rights Reserved

Nylon-6,6 is formed by condensation polymerisation



Your notes



Your notes

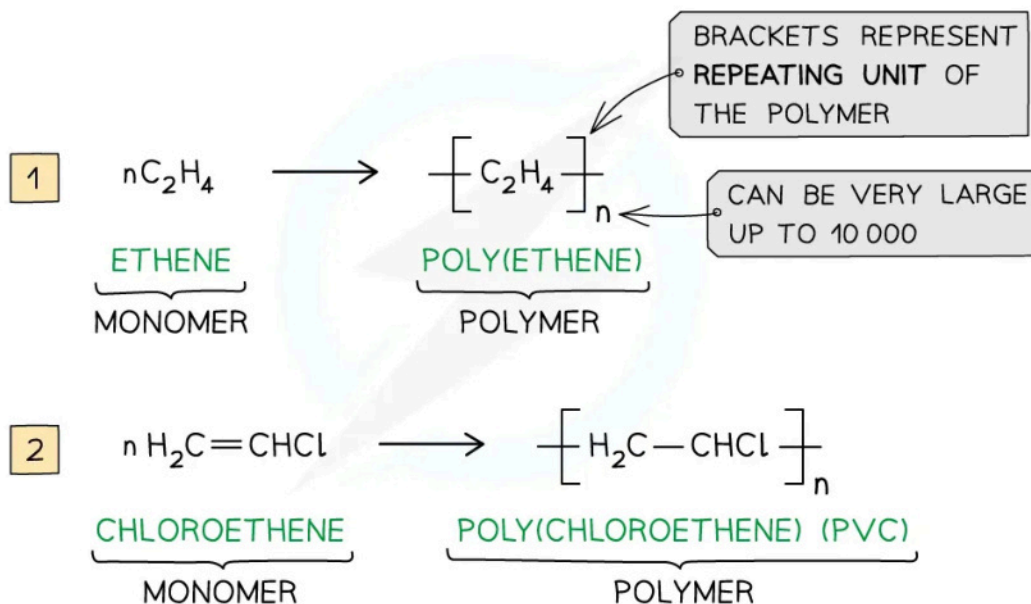
Addition Polymers

Addition Polymers

What is addition polymerisation?

- **Addition polymerisation** is one of the most important addition reactions of alkenes which form the basis of the plastic industry
- Addition polymerisation is the reaction in which many **monomers** containing at least one C=C double bond form long chains of **polymers** as the only product
 - Just like in other addition reactions of alkenes, the π -bond in each C=C bond breaks and then the monomers link together to form new C-C single bonds
- A **polymer** is a long-chain molecule that is made up of many repeating units
- The small, reactive molecules that react together to form the polymer are called **monomers**
- A polymerisation reaction can be represented by a **general formula** or by using **structural / displayed formulae**
 - E.g. poly(ethene) and poly(chloroethene) (also known as **PVC**) are polymers made up of the ethene and chloroethene monomers respectively and are commonly used in making plastics

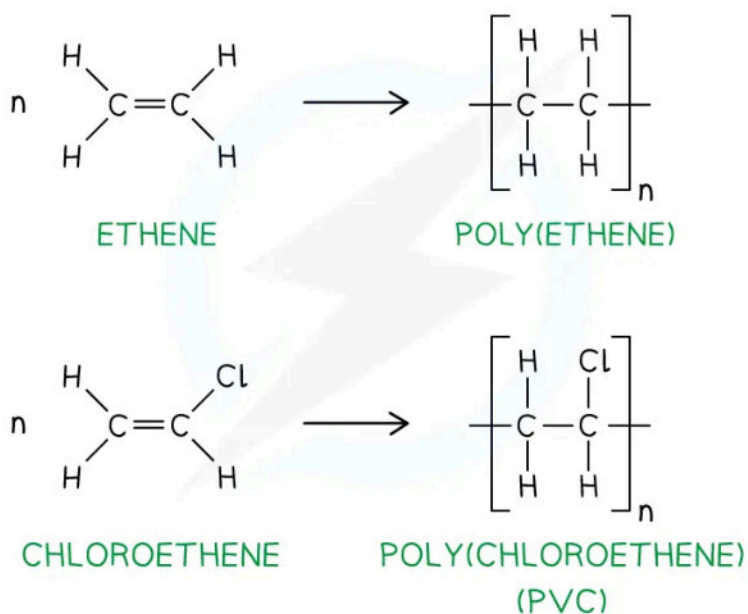
General Formula Addition Polymerisation



Copyright © Save My Exams. All Rights Reserved

The general formulae of the addition polymerisation of ethene (1) and chloroethene (2)

Displayed / Structural Formula for Addition Polymerisation



The addition polymerisation of ethene (1) and chloroethene (2)

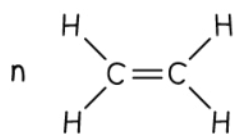
- Just like any other **addition** reaction of alkenes, addition polymerisation gives only **one** product

Deducing repeat units

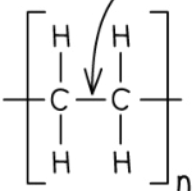
- A **repeat unit** is the smallest group of atoms that when connected one after the other make up the polymer chain
 - It is represented by **square brackets** in the displayed and general formula
- In **poly(alkenes)** (such as poly(ethene)) and **substituted poly(alkenes)** (such as PVC) made of **one type of monomer** the repeating unit is the same as the monomer except that the C=C double bond is changed to a C-C single bond

Repeating Units for Addition Polymerisation

1



ETHENE
MONOMER

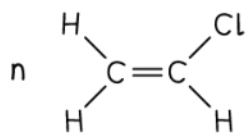


POLY(ETHENE)
REPEATING UNIT
OF POLYMER

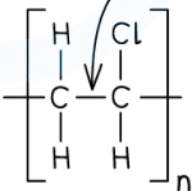
DOUBLE BOND HAS
CHANGED INTO A
SINGLE BOND

MONOMER AND REPEATING
UNIT ARE THE SAME

2



CHLOROETHENE
MONOMER



POLY(CHLOROETHENE)
REPEATING UNIT
OF POLYMER

DOUBLE BOND HAS
CHANGED INTO A
SINGLE BOND

MONOMER AND REPEATING
UNIT ARE THE SAME

Copyright © Save My Exams. All Rights Reserved

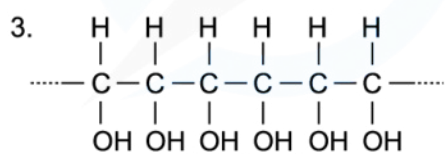
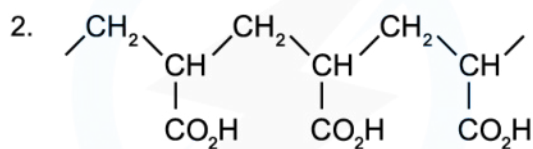
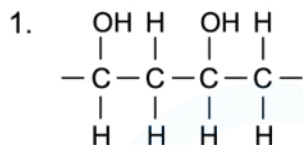
The repeating units of poly(ethene) and poly(chloroethene) are similar to their monomer except that the C=C bond has changed into a C-C bond



Your notes

Worked example

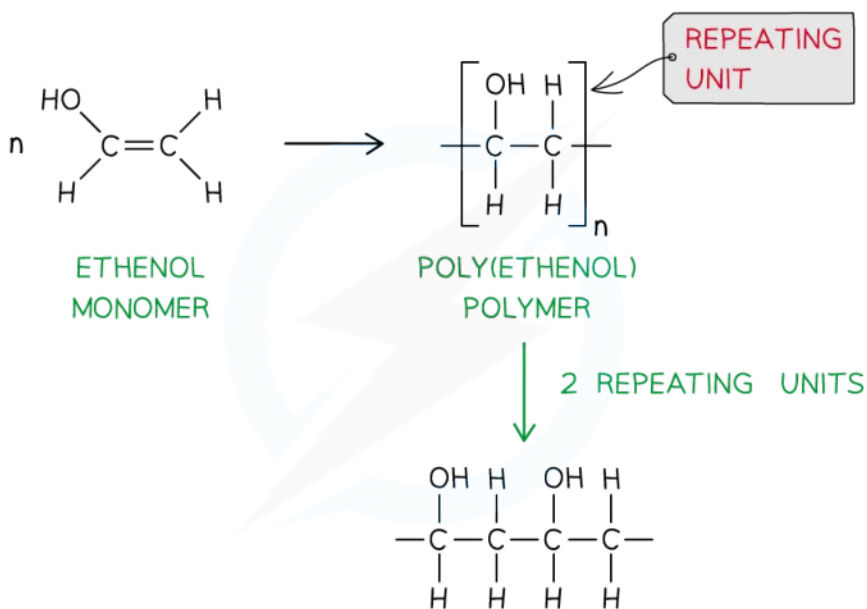
Identify the monomers present in the given sections of addition polymer molecules:



Copyright © Save My Exams. All Rights Reserved

Answer 1:

- When ethenol ($\text{CH}(\text{OH})=\text{CH}_2$) is polymerised, the C-C double bond opens to produce a repeating unit of $\text{CH}(\text{OH})-\text{CH}_2$
- This gives the polymer poly(ethenol)



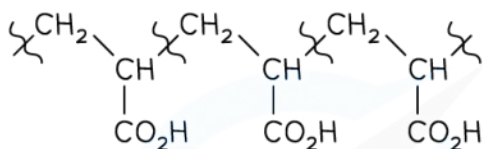
Copyright © Save My Exams. All Rights Reserved



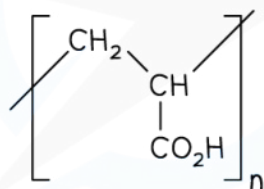
Your notes

Answer 2:

- To find the monomer, first the repeating unit should be deduced
- Repeating units have only 2 carbons in the polymer main chain



ONE REPEATING UNIT

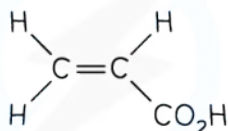


POLY(PROP-2-ENOIC ACID)

Copyright © Save My Exams. All Rights Reserved

Since the repeating unit is now found, it can be concluded that the monomer is prop-2-enoic acid

MONOMER



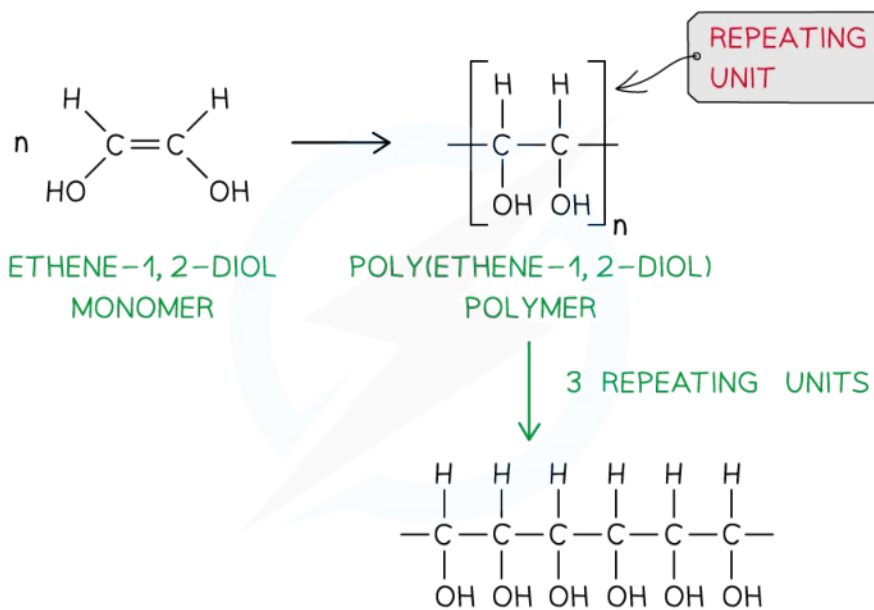
PROP-2-ENOIC ACID

Copyright © Save My Exams. All Rights Reserved
Answer 3:

- Again, the repeating unit only has 2 carbons in the polymer chain which in this case are two carbon atoms that each contain one OH group
- Thus, when ethene-1,2-diol ($\text{CH}(\text{OH})=\text{CH}(\text{OH})$) is polymerised, the $\text{C}=\text{C}$ double bond opens to produce a repeating unit of $\text{CH}(\text{OH})-\text{CH}(\text{OH})$ which gives the polymer poly(ethene-1,2-diol)



Your notes



Examiner Tip

- The section of the polymer chain shown inside the square brackets by the structural or displayed formula is the **repeat unit** and **not** the monomer
- The monomer is the same as the repeat unit except that it has C=C bonds instead of C-C bonds